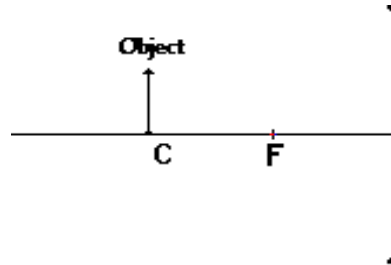


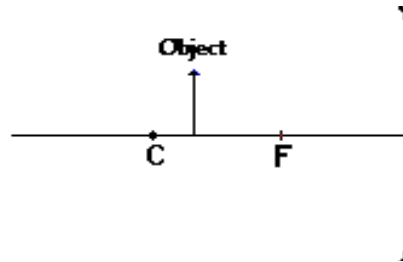
Concave Mirrors and Ray Diagrams

Find the location and describe the characteristics of an image formed by an object placed at each of the following locations:

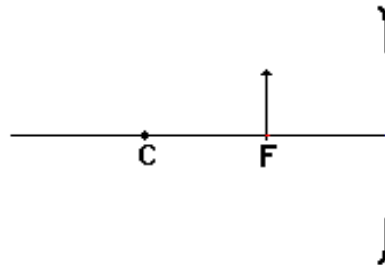
1. At C



2. Between C and F



3. At F



4. Between F and the mirror

